



ME3-16 The Minute Hand

When the minute hand moves from one number on the clock face to the next, 5 minutes have passed.


How many minutes is it past 9:00?
Count by 5s.



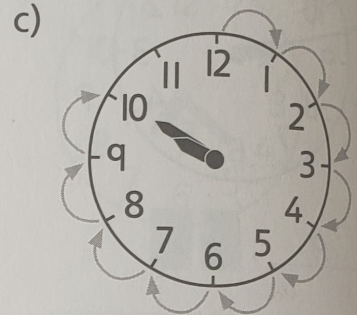
1. How many minutes is it past 9:00? Count by 5s.




25 minutes



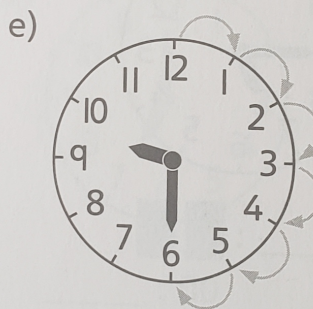
_____ minutes



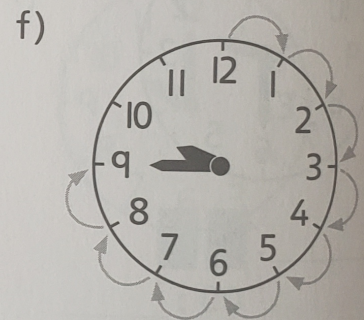
_____ minutes



_____ minutes




_____ minutes



_____ minutes

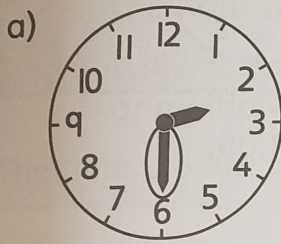
2. Rob thinks that the time is 9:05 because the minute hand points at 5.

Explain his mistake. _____

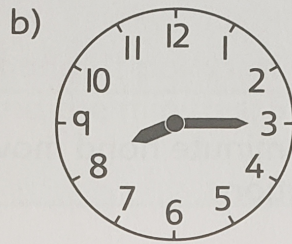


REMINDER ▶ The minute hand is the longer hand.

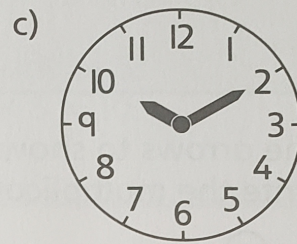
3. Circle the minute hand. Then count by 5s to write the minutes.



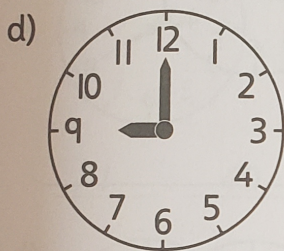
2 : 30



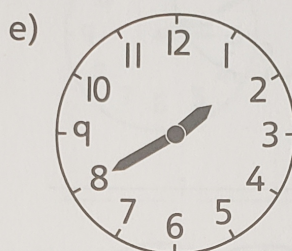
8 : _____



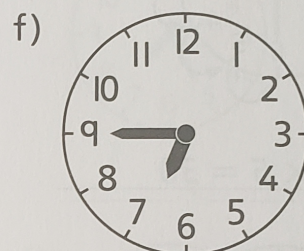
10 : _____




9 : _____




1 : _____



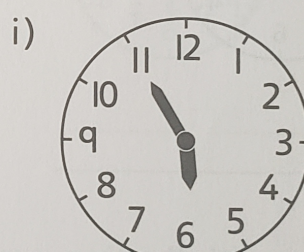
6 : _____



11 : _____

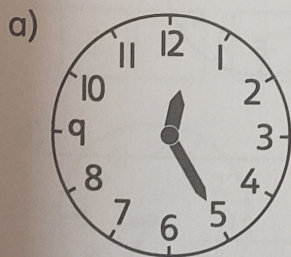


3 : _____

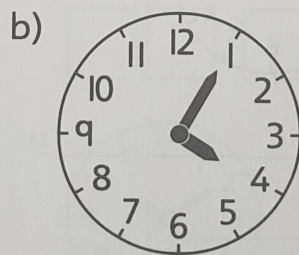


5 : _____

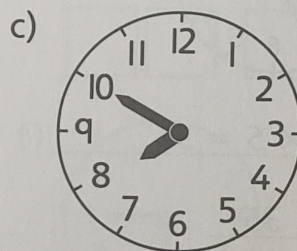
4. What time is it?



_____ minutes past 12



_____ minutes past 4



_____ minutes past 7