


ME3-14 Digital Clocks

Digital clocks show both the hours and the minutes with two digits. The digital clock shows that 5 minutes have passed after 3 o'clock.


We say the time is 3:05 or 5 minutes past 3.




1. Write the time in numbers.



2:17






2. Write the time in words and numbers.





15 minutes past 7










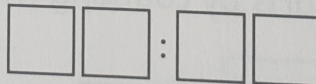


3. Write the time the way it looks on a digital clock.

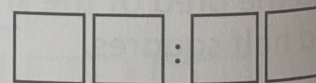
a) 7:01



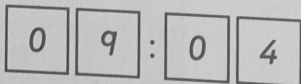
b) 4:15



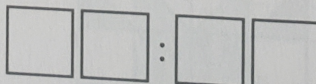
c) 3:08



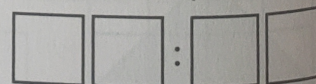
d) 4 minutes past 9



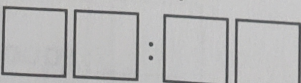
e) 12 minutes past 12



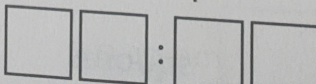
f) 9 minutes past 11



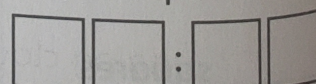
g) 23 minutes past 2



h) 30 minutes past 6



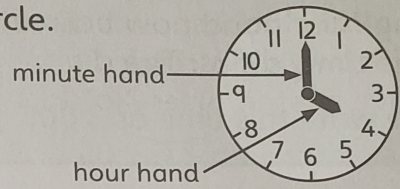
i) 1 minute past 2



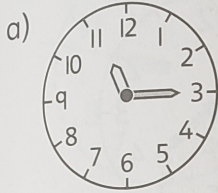
ME3-15 Analog Clock Faces and Hands

Analog clock faces show numbers from 1 to 12 in a circle.
An analog clock has different hands.

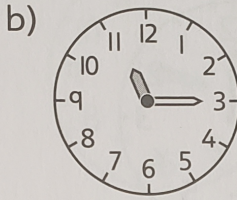
The **hour hand** is shorter.
The **minute hand** is longer.



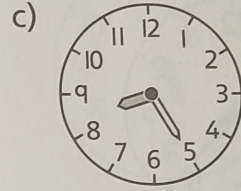
1. Which hand is shaded, the hour hand or the minute hand?



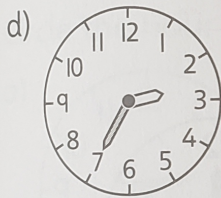
hour minute



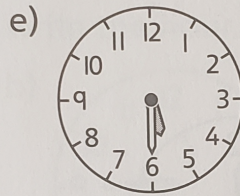
hour minute



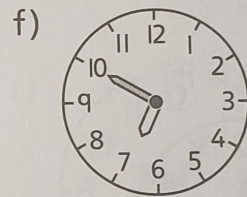
hour minute



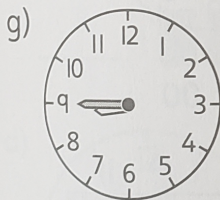
hour minute



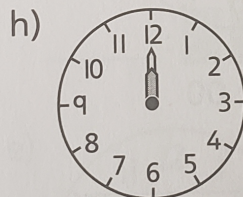
hour minute



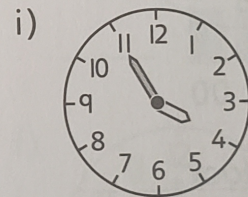
hour minute



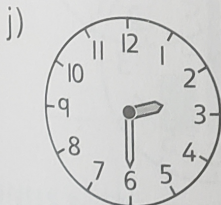
hour minute



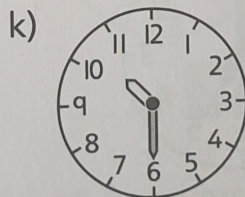
hour minute



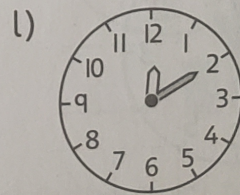
hour minute



hour minute



hour minute



hour minute

2. How is an analog clock face the same as a number line? How is it different from a number line?